
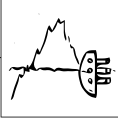




























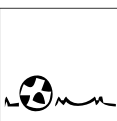









5 l–n
Navíc jsou tu úkoly **n** a **o**.

? Náповěda stojí po 40 min 3 b, po 70 min 1 b.
Řešení stojí po 90 min 5 b, po 120 min 0 b.
Hledejte na JV rohu objektu.

Počítací > 21 b
Flexibilní > 11 b
Vykutaleň > 10 b
Stolováci > 10 b
Kontinentální > 15 b
Nepřítomná > 14 b
Dočasná > 12 b
Obtížná > 7 b
Detektivní > 7 b
Superhrdinská > 7 b
Cít >

	$2 - 4 + 13$			$13 + 20 - 8$			$3 - 6 + 9$			$4 / 2 \times 8$	
	$6 - 15 + 12$			$2 - 4 + 16$			$11 + 4 - 8$			$9 - 8 + 25$	
	$5 - 3 + 16$			$7 - 9 + 14$			$12 + 10 - 7$			$1 - 6 + 15$	
	$11 + 4 - 2$			$2 - 7 + 10$			$10 - 2 + 15$			$4 \times 2 / 4$	
	$6 - 5 + 18$			$15 + 9 - 2$			$13 + 9 - 3$				

EKFVEGNREWIYINKBLKGBHJ